

2425-CS4423: Sample Exam Paper ANS with solutions

For more information on this paper, and how it relates to the actual example, refer to discussion in Class in Week 12.

- Q1. (a) Give an example (e.g., by sketching) of a simple connected graph of order 6, and size 7.

Answer: Any graph with 6 nodes and 7 edges will do.

Is there any simple graph of order 6 and size 16? Explain your answer.

Answer: No. A simple graph on 6 nodes can have at most $\binom{6}{2} = 15$ edges.

Explain why there is no simple connected graph of order 6 and size 4.

Answer: For a graph with 6 nodes to be connected, it needs at least 5 edges.

- (b) Consider the graph, G_1 , shown in Figure 1. Write down the adjacency matrix, A_1 , for G_1 .

Answer:

$$A_1 = \begin{pmatrix} 0 & 1 & 1 & 0 & 0 & 0 & 0 \\ 1 & 0 & 0 & 1 & 1 & 0 & 0 \\ 1 & 0 & 0 & 1 & 0 & 1 & 0 \\ 0 & 1 & 1 & 0 & 1 & 1 & 0 \\ 0 & 1 & 0 & 1 & 0 & 0 & 1 \\ 0 & 0 & 1 & 1 & 0 & 0 & 1 \\ 0 & 0 & 0 & 0 & 1 & 1 & 0 \end{pmatrix}$$

- (c) Explain why G_1 is *not* bipartite. ANS It has 3-cycles: $1 - 3 - 4$ and $2 - 3 - 5$.
Give an example of a subgraph of G_1 which is of order 7 and size 8 which *is* bipartite.

Answer: Subgraph obtained by deleting, e.g., edges $1 - 5$ and $2 - 4$; or edges $1 - 3$ and $2 - 3$, etc. But note that it is not enough just to delete any pair of edges. E.g., removing $2 - 3$ and $3 - 4$ still leaves a 3-cycle.

Give an example of a subgraph of G_1 which is of order 7 and is a tree.

Answer: Any options, e.g., graph obtained by deleting $1 - 5$, $2 - 3$, $3 - 4$, and $4 - 6$.

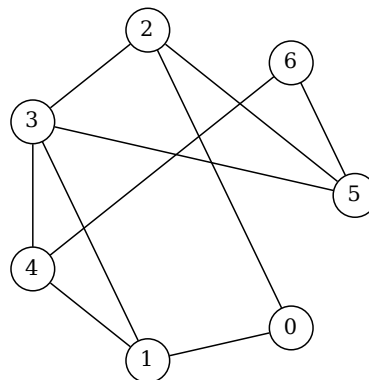
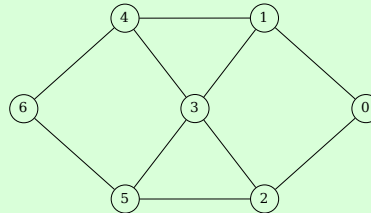


Figure 1: Graph G_1 from Question 1

Q2. (a) Sketch the graph with adjacency matrix

$$\begin{pmatrix} 0 & 1 & 1 & 0 & 0 & 0 & 0 \\ 1 & 0 & 0 & 1 & 1 & 0 & 0 \\ 1 & 0 & 0 & 1 & 0 & 1 & 0 \\ 0 & 1 & 1 & 0 & 1 & 1 & 0 \\ 0 & 1 & 0 & 1 & 0 & 0 & 1 \\ 0 & 0 & 1 & 1 & 0 & 0 & 1 \\ 0 & 0 & 0 & 0 & 1 & 1 & 0 \end{pmatrix}$$

Answer: Actually, this is just the adjacency matrix of G_1 from Figure 1. But here is a nicer plot of it:



(b) Let A be the adjacency matrix of a graph G . Explain how one can compute the size of G as a function of the entries of A . **ANS** Sum the entries and divide by 2.

(c) Let A be the adjacency matrix of a graph G . Explain how one can compute the degree of the nodes of G as a function of the entries of A^2 .

Answer: $(A^2)_{ii}$ is the degree of Node i .

(d) Let A be the adjacency matrix of a graph G . Explain how one can compute the number of triangles in G as a function of A^3 .

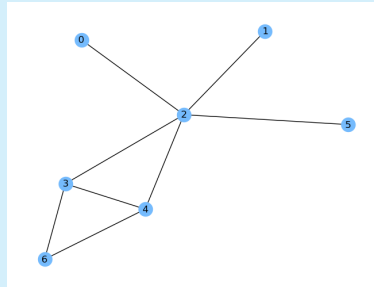
Answer: $\text{trace}(A^3)/6$; see also Task 3 of Assignment 2 Part 2.

Q3. Consider the graph, G_3 , generated by the following `networkx` instruction:

```
1 G3 = nx.Graph([[0,2], [1,2], [2,3], [2,4], [3,4], [2,5], [3,4], [3,6], [4,6]])
```

(a) Sketch G_3 .

Answer:



(b) Calculate the *normalised degree centrality* of all nodes in G_3 .

Answer: 0: 1/6; 1: 1/6; 2: 5/6; 3: 1/2; 4: 1/2; 5: 1/6; 6: 1/3

(c) Determine both the radius and diameter of G_3 .

Answer: For this, and the next question, it might help to note that the distance matrix is:

$$D = \begin{pmatrix} 0 & 2 & 1 & 2 & 2 & 2 & 3 \\ 2 & 0 & 1 & 2 & 2 & 2 & 3 \\ 1 & 1 & 0 & 1 & 1 & 1 & 2 \\ 2 & 2 & 1 & 0 & 1 & 2 & 1 \\ 2 & 2 & 1 & 1 & 0 & 2 & 1 \\ 2 & 2 & 1 & 2 & 2 & 0 & 3 \\ 3 & 3 & 2 & 1 & 1 & 3 & 0 \end{pmatrix}$$

The we see the radius is 2, and diameter is 3.

(d) Compute the *closeness centrality* of all nodes in G_3 . **ANS** In order: 1/2., 1/2., 6/7, 2/9, 2/, 1/2, 6/13

(e) If one was to add another edge to G_3 . Would that necessarily change both the degree centrality and closeness centrality of some of the nodes in G_3 ? If so, would they increase or decrease. Explain your answer.

Answer: They would change, assuming the new graph was still simple. Adding an edge will increase the degree centrality of 2 nodes, Since their degree must also increase. (Aside: the degree centrality of no other node changes).

It must also *increase* the closeness centrality of the two nodes involved. (Aside: the closeness centrality of other nodes may increase too)

- Q4. (a) Describe Breadth First Search as an algorithm for computing distances between nodes in a (simple) graph. What is its input, what is its output, and what sequence of steps is taken to produce the output from the input?

Answer: See lecture notes from, e.g., Week 5, Part 2.

- (b) Consider the graph, G_4 shown in Figure 2. Show how to apply the Breadth First Search algorithm, starting at Node a , to determine, for every node, its *predecessors* on the shortest path between it and Node f . Use this information to list all shortest paths from Node a to Node f .

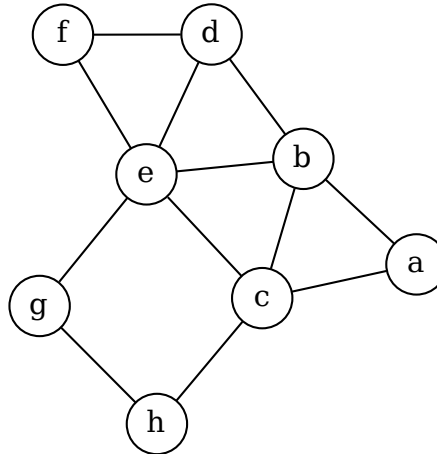
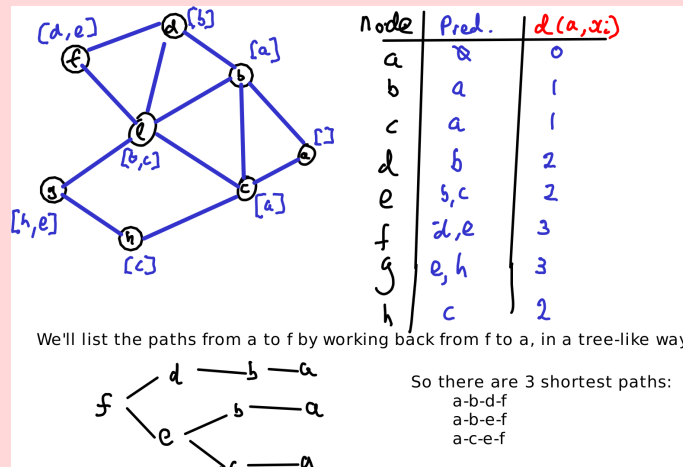


Figure 2: Graph G_4 from Question 4

Answer:

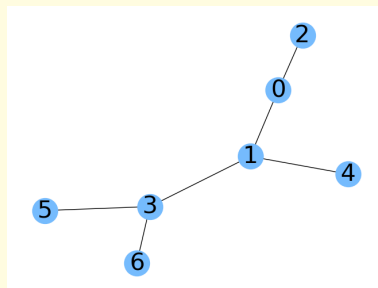


Q5. (a) Let G_5 be the tree on the nodes $\{0, 1, 2, 3, 4, 5, 6\}$ that has as its *Laplacian matrix*

$$\begin{pmatrix} 2 & -1 & -1 & 0 & 0 & 0 & 0 \\ -1 & 3 & 0 & -1 & -1 & 0 & 0 \\ -1 & 0 & 1 & 0 & 0 & 0 & 0 \\ 0 & -1 & 0 & 3 & 0 & -1 & -1 \\ 0 & -1 & 0 & 0 & 1 & 0 & 0 \\ 0 & 0 & 0 & -1 & 0 & 1 & 0 \\ 0 & 0 & 0 & -1 & 0 & 0 & 1 \end{pmatrix}$$

Sketch G_5 .

Answer:



(b) How does one construct the Prüfer code for a tree? ANS See notes from Week 5

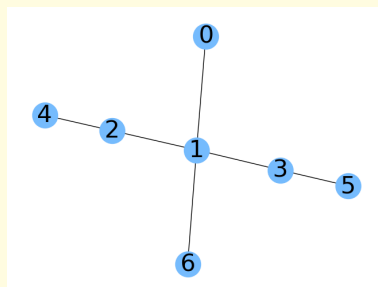
Compute the Prüfer code for G_5 from Part (a). ANS [0, 1, 1, 3, 3]

(c) How does a tree's Prüfer code relate to its degree sequence?

Answer: The degree of node i is 1 plus the number of times i occurs in the code

Construct the degree sequence for the tree on the nodes $\{0, 1, 2, 3, 4, 5, 6\}$ with Prüfer code $(1, 2, 1, 3, 1)$. Then construct and sketch the tree itself.

Answer: Degree sequence: $[1, 4, 2, 2, 1, 1, 1]$



- Q6. (a) Define the two Erdős-Rényi models, $G_{ER}(n, m)$ and $G_{ER}(n, p)$ of random graphs. ANS See lecture notes
- (b) In each model, what is the probability that a randomly chosen graph G has exactly m edges? Justify your answer.

Answer: $G_{ER}(n, m)$ has exactly m edges with probability 1, by construction. $G_{ER}(n, p)$ has exactly m edges with probability $\binom{N}{m} p^m (1-p)^{N-m}$.

- (c) A graph on 120 nodes is constructed by rolling a (fair) 6-sided die once for each possible edge: the edge is added only if the number shown is 3 or 6. What is the probability that a node chosen at random has degree 50? (You do not need to compute a numerical value. It is enough to give an explicit formula in terms of the given data).

Answer: The probability that a specific node has degree k is

$$\binom{n-1}{k} p^k (1-p)^{n-1-k}.$$

In this case $p = 1/3$, $n = 120$ and $k = 50$. So the answer is $\binom{119}{50} (1/3)^{50} (2/3)^{69}$. You don't have to compute the value of that, but if you did you would find its about 0.01056.

- Q7. (a) What is the *node clustering coefficient* of a node x in a graph G ? What is the graph clustering coefficient C of G ?

Answer: See notes, especially Sections 4.2 and 4.3 of <https://www.niallmadden.ie/2425-CS4423/W10/CS4423-W10-Part-2.html>

- (b) Determine the graph clustering coefficient C of a random graph in the $G_{ER}(n, p)$ model.

Answer: For a node, i , with degree k , the social graph of i (i.e., the subgraph induced by the neighbours of i) has order k . Of the potential $\binom{k}{2}$ edges, one expects $p\binom{k}{2}$ to be present. Consequently, the clustering coefficient of i is

$$c_i = \frac{p\binom{k}{2}}{\binom{k}{2}} = p.$$

Then $C = \frac{1}{n} \sum_{i=1}^n c_i = \frac{1}{n} (np) = p$.

How does C behave in the limit $n \rightarrow \infty$, when the average node degree is kept constant? What practical consequence does this observation have?

Answer: $G_{ER}(n, p)$ has average degree k if $p = k/n$. So, if $k = np$ is some fixed constant, then, as $n \rightarrow \infty$ we must have $p \rightarrow 0$. Consequently, we get $C \rightarrow 0$. In practical terms, this means that $G_{ER}(n, p)$ will have a negligible number of triangles. Therefore, $G_{ER}(n, p)$ graphs do not exhibit the high clustering/transitivity observed in real small-world networks.

- (c) Describe the *Watts-Strogatz small-world model* (WS model). What properties does a random graph sampled from the WS model have, that one wouldn't find in a random graph sampled from the $G_{ER}(n, p)$ model, or in an (n, d) -circle graph?

Answer: See <https://www.niallmadden.ie/2425-CS4423/W11/CS4423-Week11-Part-1.html>